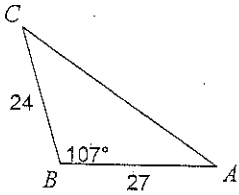
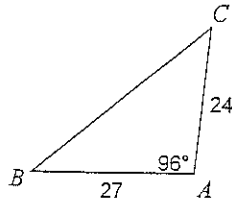


Find each measurement indicated. Round your answers to the nearest tenth.

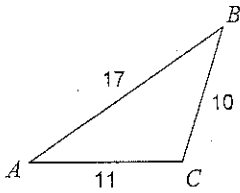
1. Find  $m\angle C$



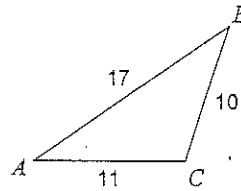
1. Find  $m\angle B$



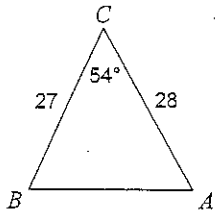
2. Find  $m\angle A$



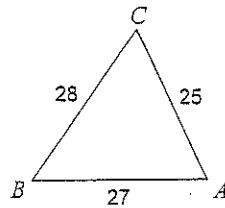
2. Find  $m\angle A$



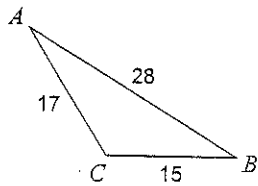
3. Find  $m\angle A$



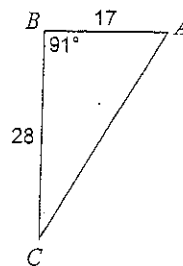
3. Find  $m\angle C$



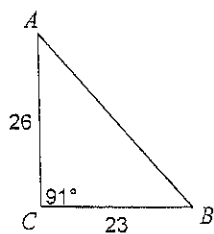
4. Find  $m\angle B$



4. Find  $m\angle C$



5. Find  $m\angle A$



5. Find  $m\angle B$

